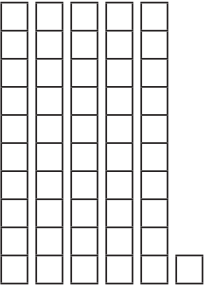
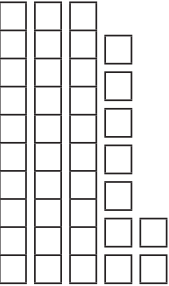
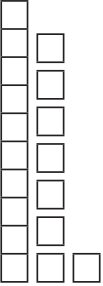
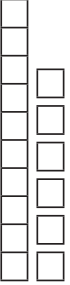



# Place Value

Write how many groups of tens and ones there are. Then, add the digits.

|  |  |
|--|--|
|    | _____ tens _____ ones<br>_____ + _____ = _____ |
|    | _____ tens _____ ones<br>_____ + _____ = _____ |
|   | _____ tens _____ ones<br>_____ + _____ = _____ |
|  | _____ tens _____ ones<br>_____ + _____ = _____ |
|  | _____ tens _____ ones<br>_____ + _____ = _____ |