



# Revision mat

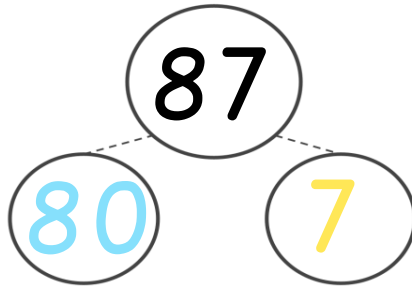
Comparing and ordering within 100

## Activity 2

Draw the tens and ones.

$$50 + 6 = 56$$

| Tens | Ones |
|------|------|
|      |      |



## Activity 1

Write the addition sentences.

$$80 + 7 = 87 \quad \square + \square = 87$$

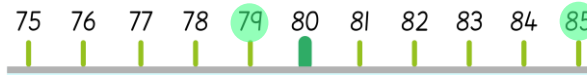
$$87 = \square + \square \quad 87 = \square + \square$$

## Activity 3

Compare each pair.

ninety-three      sixty-eight

79      85



## Activity 4

Order these numbers and objects.

29      sixty

Greatest smallest



## Revision mat

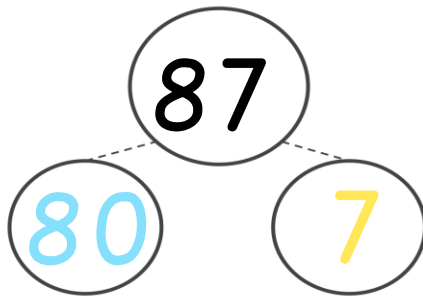
Comparing and ordering within 100

### Activity 2

Draw the tens and ones.

$$\square + \square = 56$$

| Tens | Ones |
|------|------|
|      |      |



### Activity 1

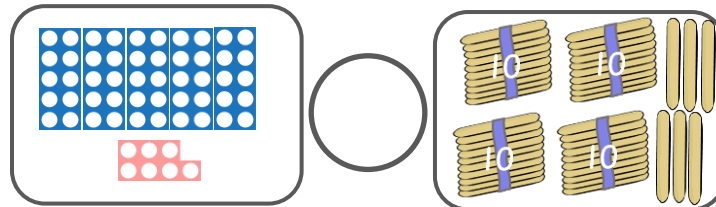
Write the addition sentences.

$$80 + 7 = \square \quad \square + \square = \square$$

$$\square = \square + \square \quad \square = \square + \square$$

### Activity 3

Compare each pair.



ninety-three ○ sixty-eight

79 ○ 85

### Activity 4

Order these numbers and objects.

29    sixty      

Greatest smallest

Four dashed boxes for ordering the numbers and objects from greatest to smallest.