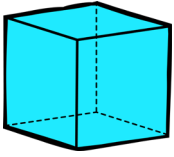


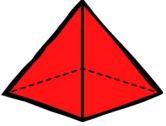
3D Shapes




1 Match the shape to its name.



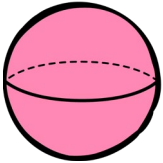
cuboid



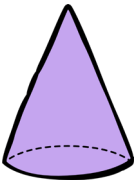
cone



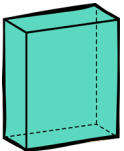
cube



cylinder

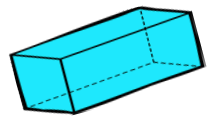
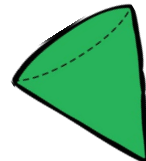
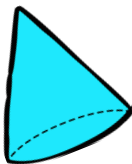
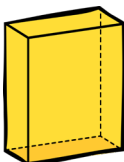
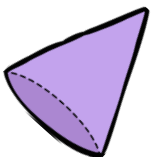


sphere

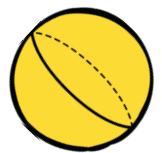
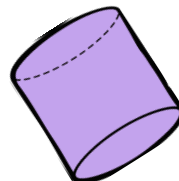
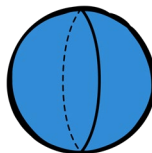
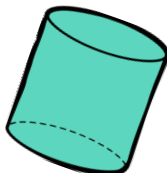

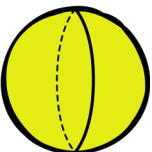


pyramid

2 a Circle the cuboids. Tick (✓) the cones.



b Circle the spheres. Tick (✓) the cylinders.

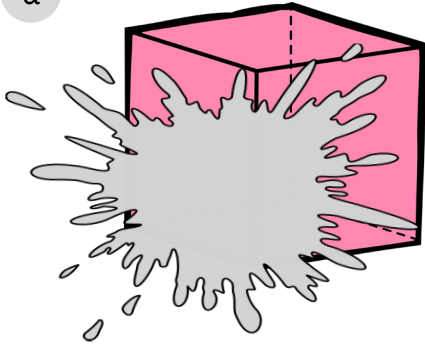


3D Shapes

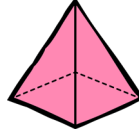
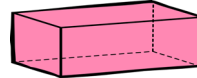
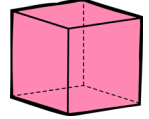


1 Identify the hidden shape.


a



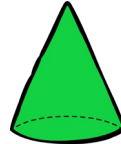
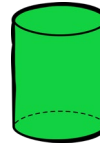
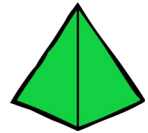
What shape is this?
Tick (✓) the correct shape.

☐☐☐


b



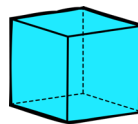
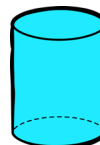
What shape is this?
Tick (✓) the correct shape.

☐☐☐

c



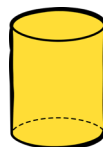
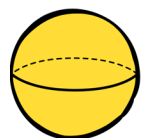
What shape is this?
Tick (✓) the correct shape.

☐☐☐

d



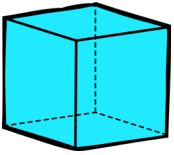
What shape is this?
Tick (✓) the correct shape.

☐☐☐

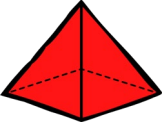
3D Shapes



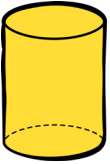
1 Match the shape to its name.



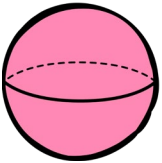
cuboid



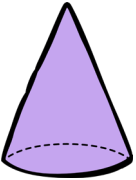
cone



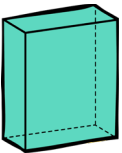
cube



cylinder

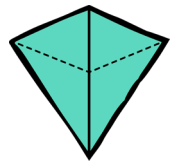
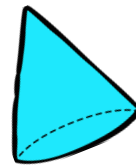
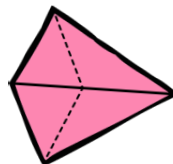
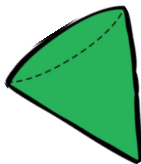
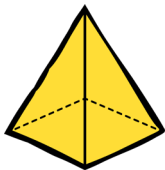
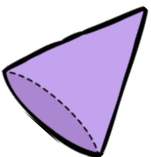


sphere

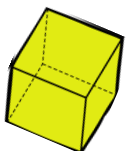
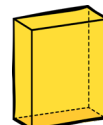
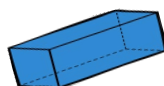
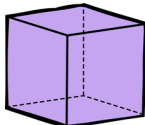

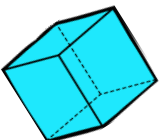


pyramid

2 a Circle the cones. Tick (✓) the pyramids.



b Circle the cuboids. Tick (✓) the cubes.

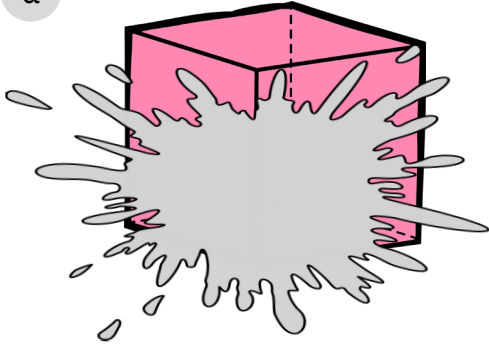


3D Shapes

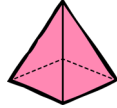


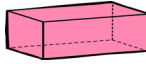
1 Identify the hidden shape and explain how you know.

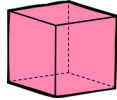
a




Tick (✓) the correct shape and explain how you know.

☐

☐

☐

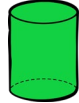
b




Tick (✓) the correct shape and explain how you know.

☐

☐

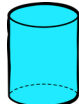
☐

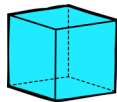
c



Tick (✓) the correct shape and explain how you know.

☐

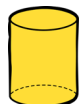
☐

☐

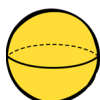
d



Tick (✓) the correct shape and explain how you know.

☐

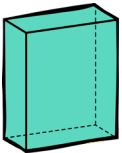
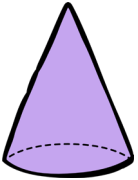
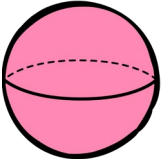
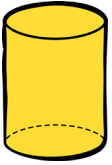
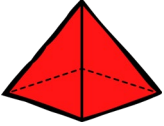
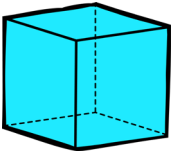
☐

☐

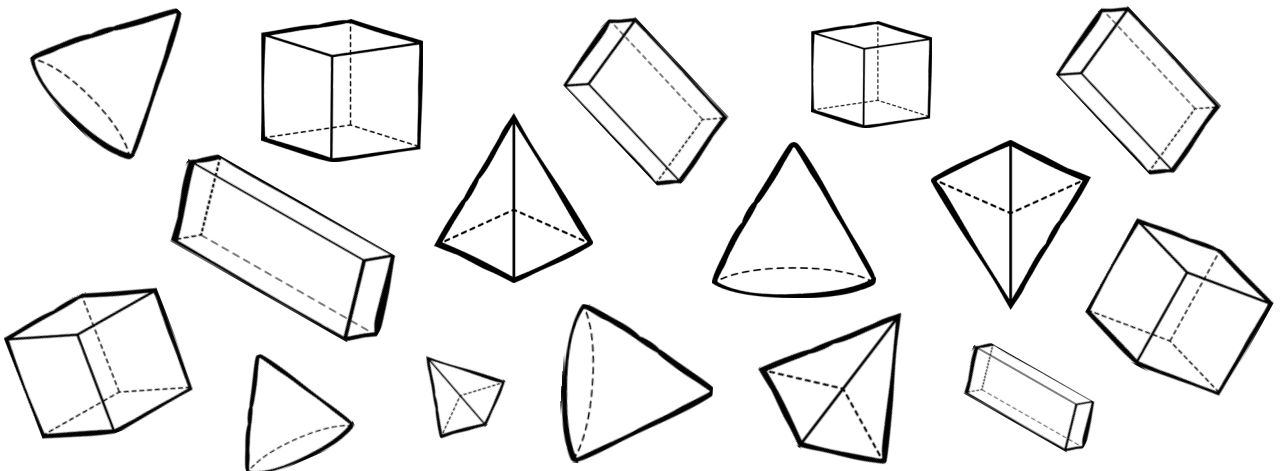
3D Shapes



1 Name the 3D shape.



2 Colour the cuboids blue, cubes green, pyramids red and cones yellow.




3D Shapes




1 Identify the hidden shape and explain how you know.

a




What shape could it be?
Explain how you know.

b



What shape could it be?
Explain how you know.

c



What shape could it be?
Explain how you know.

d



What shape could it be?
Explain how you know.

Answers

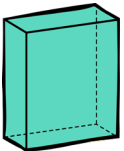
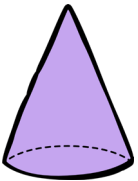
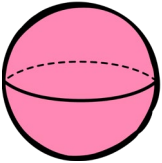

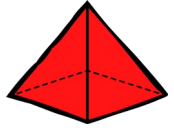
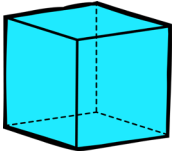
To avoid wasting paper & ink,
please do not print this page.



3D Shapes



1 Match the shape to its name.



cuboid

cone

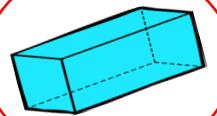
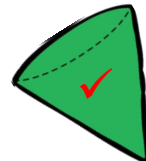
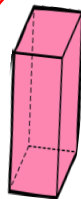
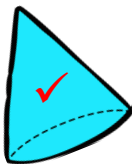
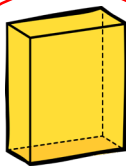
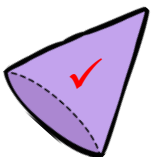
cube

cylinder

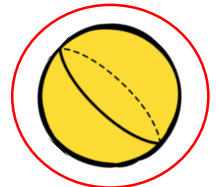

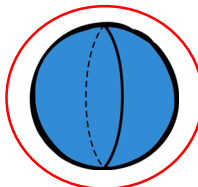

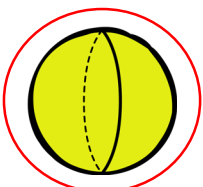
sphere

pyramid

2 a Circle the cuboids. Tick (✓) the cones.



b Circle the spheres. Tick (✓) the cylinders.

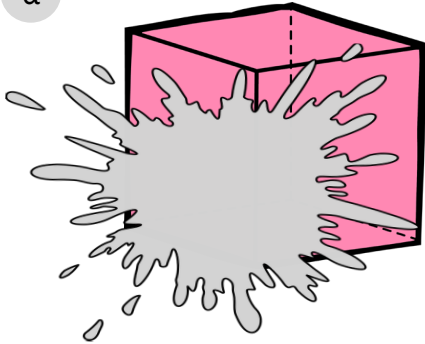


3D Shapes

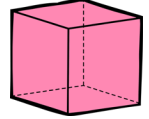
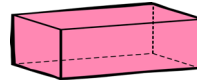
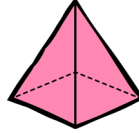


1 Identify the hidden shape.


a



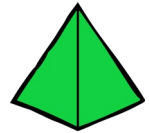
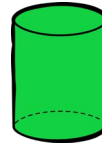
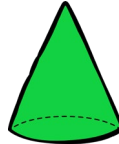
What shape is this?
Tick (✓) the correct shape.




b



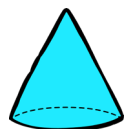

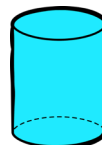
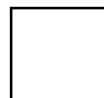
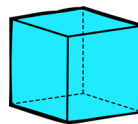
What shape is this?
Tick (✓) the correct shape.



c



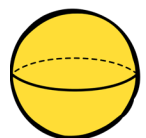
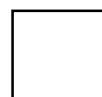
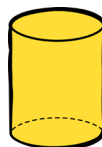
What shape is this?
Tick (✓) the correct shape.



d



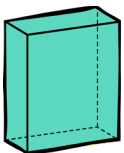
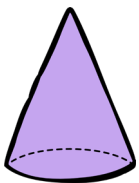
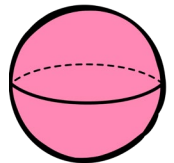

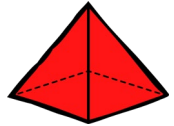
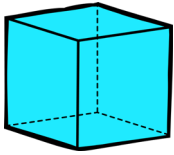
What shape is this?
Tick (✓) the correct shape.



3D Shapes



1 Match the shape to its name.



cuboid

cone

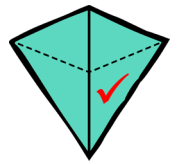
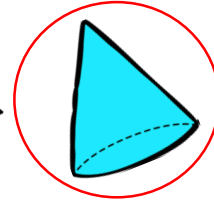
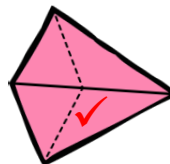

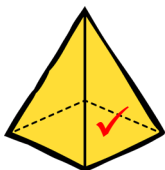
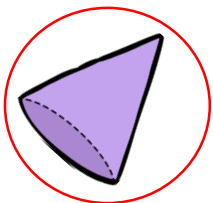
cube

cylinder

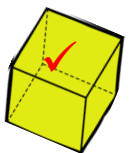
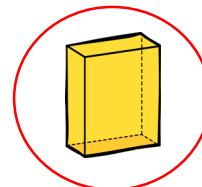
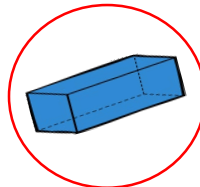
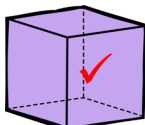
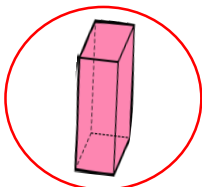
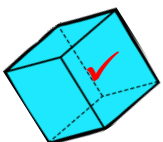
sphere

pyramid

2 a Circle the cones. Tick (✓) the pyramids.



b Circle the cuboids. Tick (✓) the cubes.

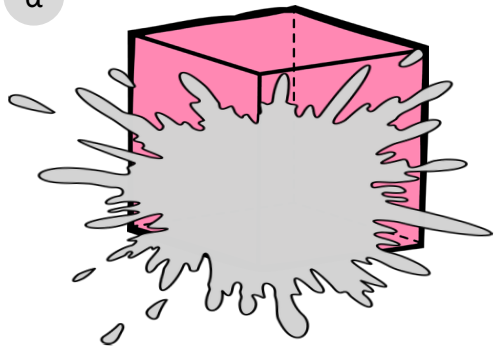


3D Shapes

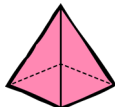


1 Identify the hidden shape and explain how you know.

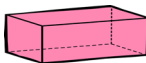
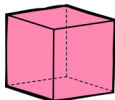
a




Tick (✓) the correct shape and explain how you know.


☐

Each face is a square and sides
are the same length.


☐

☒

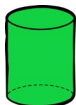
b




Tick (✓) the correct shape and explain how you know.


☒

It has a point and a curved face.


☐

☐

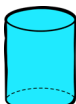
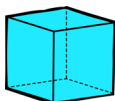
c



Tick (✓) the correct shape and explain how you know.


☐


It has straight lines and a curved
face.


☒

☐

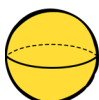
d



Tick (✓) the correct shape and explain how you know.


☐

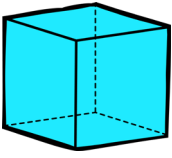
It has no straight lines and only
has one curved face.


☐

☒

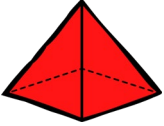
3D Shapes




1 Name the 3D shape.



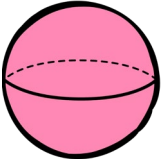
cube



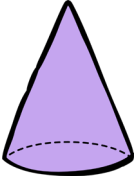
pyramid



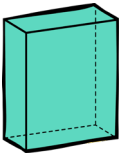
cylinder



sphere

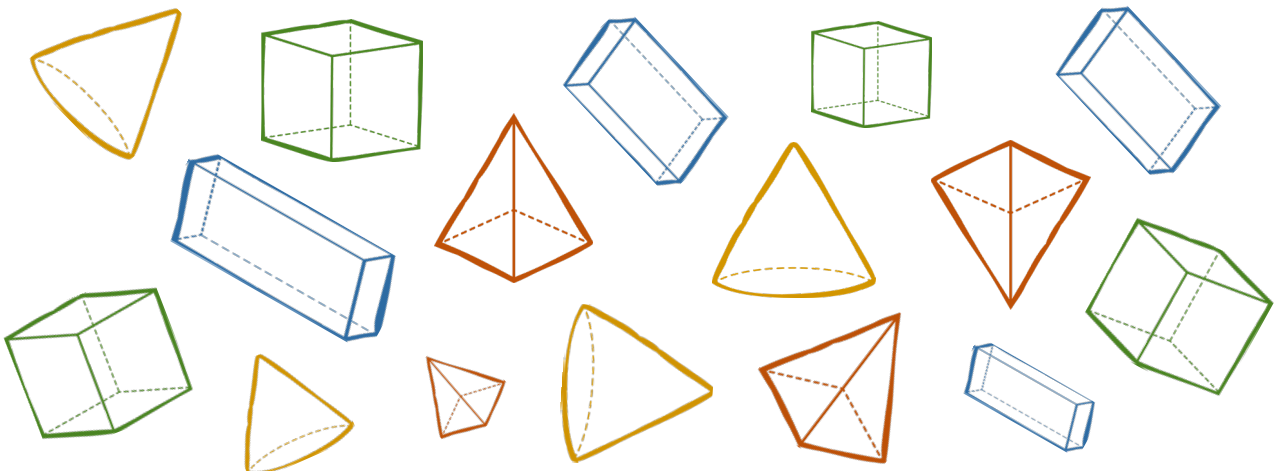


cone



cuboid

2 Colour the cuboids blue, cubes green, pyramids red and cones yellow.




3D Shapes



1 Identify the hidden shape and explain how you know.


a



What shape could it be?
Explain how you know.

Cube or cuboid. Two straight sides and faces
could either be just square or a combination
of squares and rectangles.


b



What shape could it be?
Explain how you know.

Cone or pyramid.
There is a point. The surface could either be
circle or square.

c



What shape could it be?
Explain how you know.

Cylinder or cone.
There is a curved face. The other side could
either have a curved face or go to a point.

d



What shape could it be?
Explain how you know.

Cuboid.
Three rectangular faces can be seen.